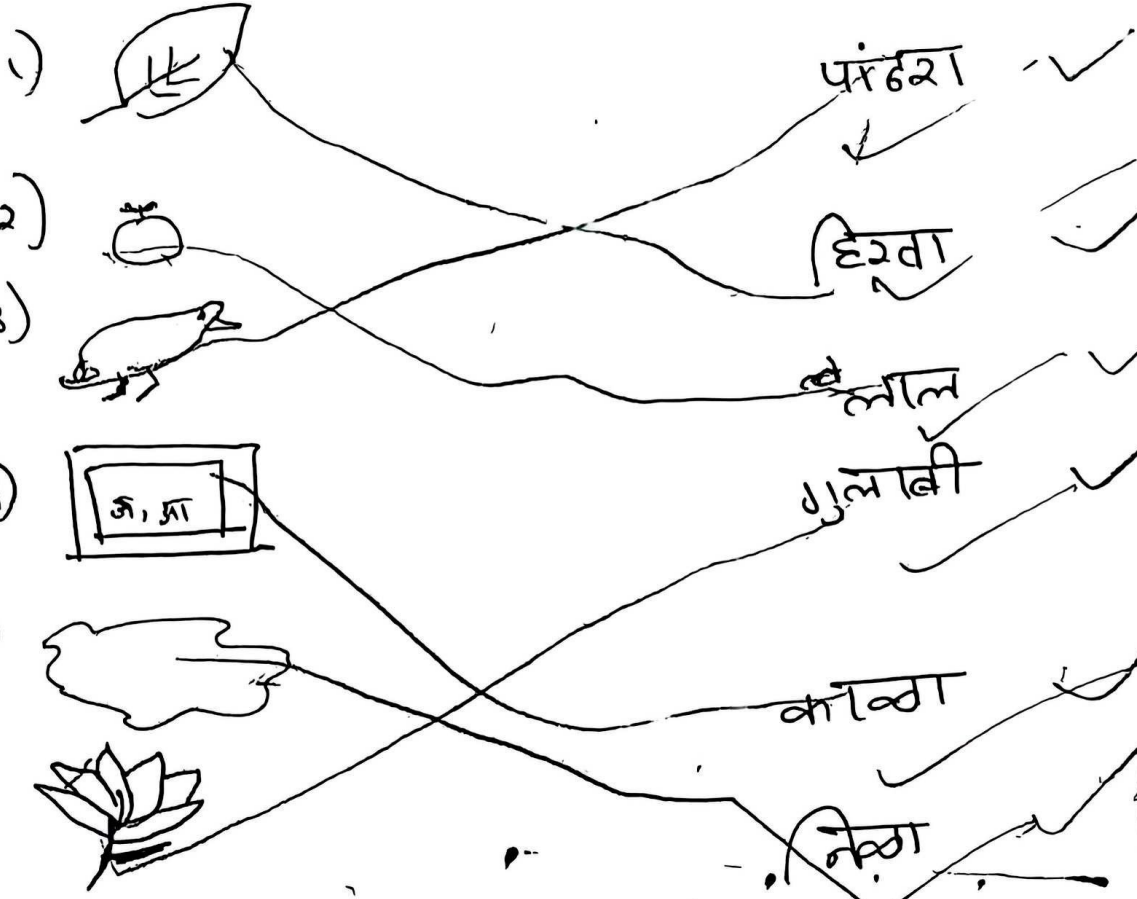


प्र-पू) शां वधा, जोडी लावा



~~पालक~~
~~पालक~~
~~पालक~~
~~पालक~~

~~काकडी~~
~~काकडी~~
~~काकडी~~
~~काकडी~~

-६) उतरे लिहा

भाज्यांची नावे लिहा
- ~~काकडी~~, ~~मिरची~~, ~~वाठो~~, ~~बंद्या~~

पाले भाज्यांची नावे लिहा

- ~~मैथुन~~, ~~नूक~~, ~~भायका~~, ~~कोथिंबीर~~

फळांची नावे लिहा

~~टरेबुल~~, ~~आषा~~, ~~केळी~~, ~~पेर~~

प्रासंक्धी शब्द लिहा

~~आटा~~, ~~शाई~~, ~~फळे~~, ~~खिंडी~~

~~टरेबुल~~
~~टरेबुल~~
~~टरेबुल~~
~~टरेबुल~~

प्र-1) मुलांमते पूर्ण करा : Marathi Test




Mom's Sign


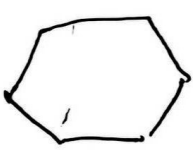
Karadu

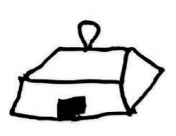


- 1) त श द घ न थ
- 2) प फ व श ङ
- 3) ष ह ङ ख ञ
- 4) थ ड न वे वा
- 5) क ख ग घ ङ

घ
श
ख
ख
ख

प्र-2) चित्र ओळखा, शब्द पूर्ण करा.

- 1)  - ढा
- 2)  - आं बा
- 3)  - चम या

- 7)  - न क
- 8)  - पटको म






- 4)  - ठ या
- 5)  - छ री छत्री
- 6)  - मा क

छत्री
छत्री
छत्री
छत्री





छ




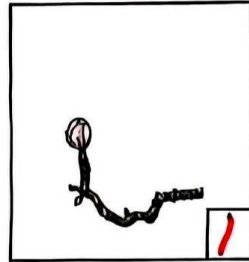



Q.10. What will you use to measure the following object tick (✓) in the box.

Object	Handspam	finger
	✓	
		✓
		✓
		✓
	✓	

Q.11. Tick (✓) the coins which will make the given amount

 - 15₹	1	2	5	10	10	20
			✓	✓		
 25₹	1	2	5	10	10	10
			✓		✓	✓
 9₹	1	2	2	5	10	20
		✓	✓	✓		
 75₹	5	20	10	10	50	
	✓	✓				✓


Q. 8 Show the sequence of actions using numbers 1, 2, 3,






Restore pages

Microsoft Edge closed unexpectedly.

Restore

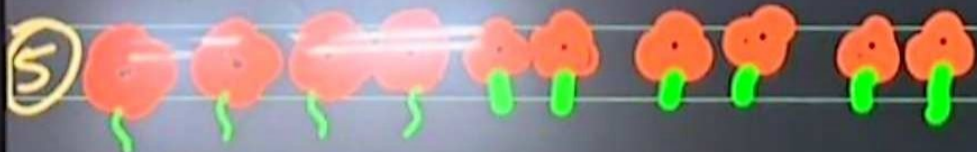


* Circle 'O' the container will hold more water .



Maths Revision

Q.3. Write appropriate number in the box.



2 flowers taken 5 times $\boxed{2} \times \boxed{5}$
means Total number of flowers $\boxed{10}$




4 balloons taken 4 times
 $\boxed{4} \times \boxed{4}$ means Total
number of balloons $\boxed{16}$

③ Divide 10 beads equally among 2 Girls.



Each girl get $\boxed{5}$ beads.



4 cups taken 2 times $\boxed{4} \times \boxed{2}$
means Total number of cups = $\boxed{8}$



January 2026

Sunday	Monday	Tuesday	Wednesday	Thursday	Friday	Saturday
				1	2	3
4	5	6	7	8	9	10
11	12	13	14	15	16	17
18	19	20	21	22	23	24
25	26 Republic day	27	28	29	30	31

Restore pages ×
Microsoft Edge closed unexpectedly.
[Restore](#)

Q.6 Observe the calendar and answer the question.

- 1 Which is the day on the 1st date? Thursday
- 2 How many days are there in this month? 31 days
- 3 Which date is on the first Saturday? 3rd January
- 4 Which day is on 26th? Monday
- 5 How many Sundays are there in this month? four

Solve:

<p>Joseph has 8 notebooks.</p> <p>Sadashiv has 4 notebooks.</p> <p>How many notebooks do they have together?</p>	$\begin{array}{r} 8 \\ + 4 \\ \hline 12 \end{array}$
<p>Manthan brought 6 flowers.</p> <p>Rehana brought 5 flowers.</p> <p>Totally how many flowers did they bring?</p>	$\begin{array}{r} 6 \\ + 5 \\ \hline 11 \end{array}$
<p>Sayali read 7 books.</p> <p>Sangeeta read 6 books.</p> <p>How many books did they read in total?</p>	$\begin{array}{r} 7 \\ + 6 \\ \hline 13 \end{array}$
<p>There are 8 trees in Simaran's garden.</p> <p>There are 6 trees in Raju's garden.</p> <p>Totally how many trees they have in their gardens?</p>	$\begin{array}{r} 8 \\ + 6 \\ \hline 14 \end{array}$
<p>Viju has 3 bulls.</p> <p>Ravi has 7 bulls.</p> <p>What is the total number of bulls they have?</p>	$\begin{array}{r} 3 \\ + 7 \\ \hline 10 \end{array}$

प्र.७. पुढील शब्दातील अक्षरांना ० करा.

अं

अंतर

अंधार

अंबर

ऋ

ऋषी

ऋचा

ऋतुजा

अः

स्वतः

शतशः

उषः काल

ढ

ढग

कढई

वाढ

ठ

पाठ

काठ

ठसा

क्ष

शिक्षक

पक्षी

रिक्षा

ज्ञ

आज्ञा

विज्ञान

ज्ञानदा

Q.7. Add.

$$\begin{array}{r} 6 \\ + 5 \\ \hline 11 \end{array}$$

$$\begin{array}{r} 6 \\ + 6 \\ \hline 12 \end{array}$$

$$\begin{array}{r} 9 \\ + 4 \\ \hline 13 \end{array}$$

$$\begin{array}{r} 12 \\ + 5 \\ \hline 17 \end{array}$$

$$\begin{array}{r} 7 \\ + 7 \\ \hline 14 \end{array}$$

$$\begin{array}{r} 9 \\ + 9 \\ \hline 18 \end{array}$$

$$\begin{array}{r} 12 \\ + 3 \\ \hline 15 \end{array}$$

$$\begin{array}{r} 5 \\ + 9 \\ \hline 14 \end{array}$$



$$\begin{array}{r} 7 \\ + 5 \\ \hline 12 \end{array}$$

$$\begin{array}{r} 8 \\ + 6 \\ \hline 14 \end{array}$$

$$\begin{array}{r} 9 \\ + 7 \\ \hline 16 \end{array}$$

$$\begin{array}{r} 9 \\ + 9 \\ \hline \end{array}$$

$$\begin{array}{r} 8 \\ + 8 \\ \hline 16 \end{array}$$






$$\begin{array}{r} 6 \\ + 5 \\ \hline 11 \end{array}$$

$$\begin{array}{r} 9 \\ + 8 \\ \hline 17 \end{array}$$





$$\begin{array}{r} 5 \\ + 5 \\ \hline 10 \end{array}$$




Q.10. What will you use to measure the following object tick (✓) in the box.

Object	Handspam	finger
	✓	
		✓
		✓
		✓
		✓

Q.11. Tick (✓) the coins which will make the given amount


 - 15₹	1	2	5	10	10	20
			✓	✓		
 25₹	1	2	5	10	10	10
			✓		✓	✓
 9₹	1	2	2	5	10	20
		✓	✓	✓		
 75₹	5	20	10	10	50	
	✓	✓				✓

9.4. Solve.




$$\boxed{5} + \boxed{2} = \boxed{7}$$

$$\boxed{7} - \boxed{5} = \boxed{2}$$

$$\boxed{7} - \boxed{2} = \boxed{5}$$



$$\boxed{5} + \boxed{4} = \boxed{9}$$

$$\boxed{9} - \boxed{5} = \boxed{4}$$

$$\boxed{9} - \boxed{4} = \boxed{5}$$


$$\boxed{5} + \boxed{3} = \boxed{8}$$

$$\boxed{8} - \boxed{5} = \boxed{3}$$

$$\boxed{8} - \boxed{3} = \boxed{5}$$


$$\boxed{6} + \boxed{4} = \boxed{10}$$

$$\boxed{10} - \boxed{6} = \boxed{4}$$

$$\boxed{10} - \boxed{4} = \boxed{6}$$

$$\boxed{4} + \boxed{3} = \boxed{7}$$

$$\boxed{7} - \boxed{3} = \boxed{4}$$

$$\boxed{7} - \boxed{4} = \boxed{3}$$

$$\boxed{6} + \boxed{5} = \boxed{11}$$

$$\boxed{11} - \boxed{5} = \boxed{6}$$

$$\boxed{11} - \boxed{6} = \boxed{5}$$

$$\boxed{9} + \boxed{4} = \boxed{13}$$

$$\boxed{13} - \boxed{9} = \boxed{4}$$

$$\boxed{13} - \boxed{4} = \boxed{9}$$

$$\boxed{8} + \boxed{7} = \boxed{15}$$

$$\boxed{15} - \boxed{8} = \boxed{7}$$


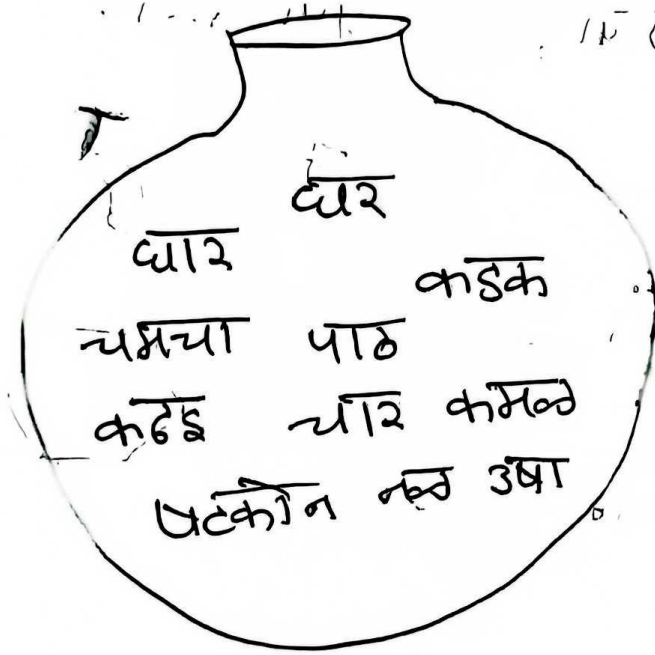
$$\boxed{15} - \boxed{7} = \boxed{8}$$

3

Q.3) यमक पदोंपात्रे शब्द लिहा:

- | | |
|-----------------|------------------|
| 1) पान - _____ | 5) कामा - _____ |
| 2) शनि - _____ | 6) दुम - _____ |
| 3) लहान - _____ | 7) धार - _____ |
| 4) पाठ - _____ | 8) इटकली - _____ |

4) दिलेल्या अक्षरांचे शब्द पंजावर लिहा



Marathi Test


Mom's Sign 17/10/19 (1)


प्र-1) मुळासुद्धे पूर्ण करा :


- 1) त _____ द _____ न
- 2) प _____ क _____ म
- 3) ट _____ ड _____ ज
- 4) थ _____ ल _____ वा
- 5) क _____ ग _____ ड


- 10/10
- 10/10/19 (2)
- 6/10 (3)
- 10/10/19 (4)


प्र-2) चित्र ओळखा, शब्द पूर्ण करा.


1)  - 6 _____


2)  - आं _____

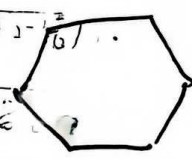
3)  - चम _____

4)  - ठ _____

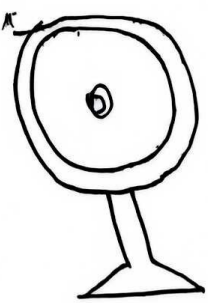
5)  - ष _____

6)  - मा _____

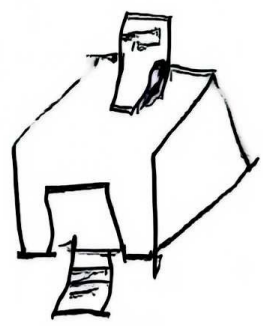
7)  - न _____

8)  - षटको _____


put a



b)



Q.5) Draw line and match Input with Output




Apple



Bowl full of Noodles




Wood



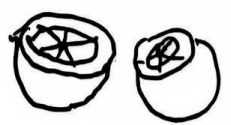
Apple Juice



Noodles




Wooden Bench




orange



Toast



Bread



orange Juice

5) You can insert a pencil inside the C.P.U.

6) The computer has an input and output device.



Q.4] Tick the Do's with ✓ and Dont's (with X)

1) Always cover the computer after using it

2) Girl cleaning the computer

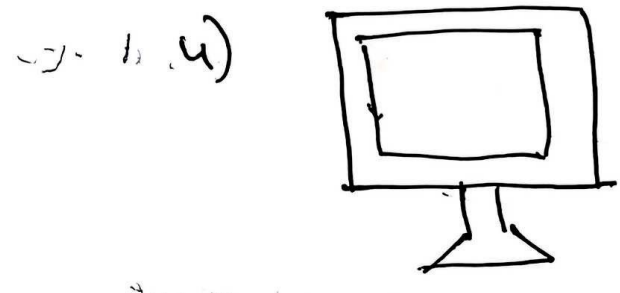
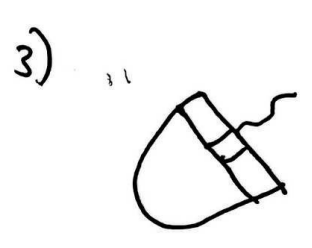


3) Ask your teacher's permission before switching on or off the computer

4) Girl putting a pencil inside the C.P.U.

5) Boy touching the computer wires

6) Do not sit close to the monitor

Q.3) Identify the input and output device



Computer Test

Mom's
Sign _____

Q.1] Fill in the blanks:-

- 1) Never press the _____ on the keyboard very hard
- 2) To start the computer press the _____ button on the C.P.U.
- 3) _____ is used to scan pictures into the computer.
- 4) _____ is used as a pointer.
- 5) Internet is used in _____.
- 6) _____ is loaded on the computer.

Q.2] Write True or False:-

- 1) Always cover the computer after using it
- 2) You can switch off the computer by directly switching off the power supply
- 3) The Joystick is used to play video games
- 4) Mouse is an example of input