

8. Ratio of sides of  $\Delta = 1 : \sqrt{2} : 1$

Let the sides be  $x : \sqrt{2}x : x$

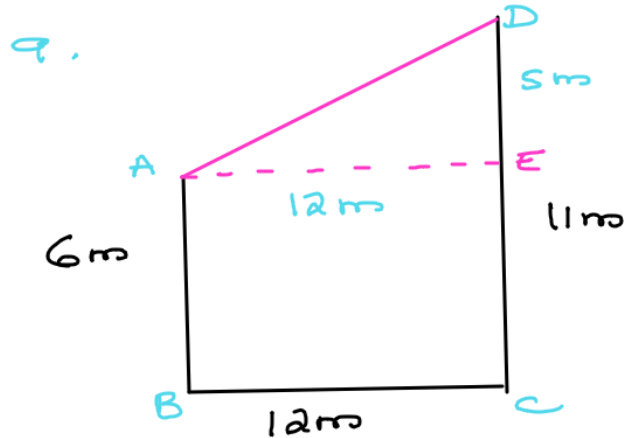
Acc. to pythagoras theorem

$$x^2 + x^2 = (\sqrt{2}x)^2$$

$$2x^2 = 2x^2$$

$$\text{L.H.S} = \text{R.H.S}$$

$\therefore$  The given  $\Delta$  is a right angled  $\Delta$ .



Construction : Draw  $AE \parallel$  to  $BC$

$$\therefore AE = 12m$$

$$\begin{aligned} DE &= DC - EC \\ &= DC - AB \quad [\because EC = AB] \\ &= 11 - 6 \\ &= 5m \end{aligned}$$

Using pythagoras theorem.

$$\begin{aligned}
 AD^2 &= AE^2 + DE^2 \\
 &= (12)^2 + (5)^2 \\
 &= 144 + 25 \\
 &= 169
 \end{aligned}$$

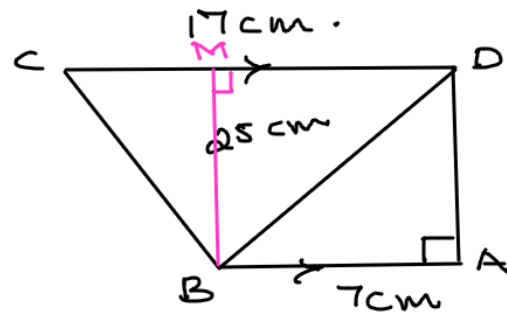
$$\begin{aligned}
 AD &= \sqrt{169} \\
 &= 13 \text{ m}
 \end{aligned}$$

10. Given:  $AB \parallel CD$   
 $AB = 7 \text{ cm}$   
 $BD = 25 \text{ cm}$   
 $CD = 17 \text{ cm}$ .

To prove:  $BC = ?$

Construction: Draw  $BM \perp$  to  $CD$

Proof:  $MD \parallel BA$   
 $MD = BA$   
 $7 \text{ cm} = 7 \text{ cm}$



In  $\triangle BDM$   
 right angled at  $M$   
 Using Pythagoras  
 theorem.

$$BD^2 = MD^2 + MB^2$$

$$(25)^2 = (1 \text{ cm})^2 + MB^2$$

$$625 - 49 = MB^2$$

$$\sqrt{576} = MB$$

$$\sqrt{\frac{2 \times 2 \times 12 \times 12}{2 \times 12}} = MB$$

$$2 \times 12 = MB$$

$$MB = 24$$

In  $\Delta CMB$

$$\begin{aligned} CM &= CD - MD \\ &= 17 - 7 \\ &= 10 \text{ cm.} \end{aligned}$$

Using pythagoras theorem.

$$\begin{aligned} CB^2 &= CM^2 + MB^2 \\ &= (10)^2 + (24)^2 \\ &= 100 + 576 \end{aligned}$$

$$\begin{aligned} CB &= \sqrt{676} \\ &= \sqrt{2 \times 2 \times 13 \times 13} \\ &= 2 \times 13 \\ &= 26 \text{ cm} \end{aligned}$$

$$\begin{array}{r} 2 \overline{) 676} \\ \underline{2} \phantom{338} \\ 2 \phantom{338} \\ \underline{2} \phantom{338} \\ 13 \phantom{169} \\ \underline{13} \\ 13 \end{array}$$

$$11. \angle B = 90^\circ$$

$$XY \parallel BC$$

$$AB = 12 \text{ cm}$$

$$AY = 8 \text{ cm}$$

$$AX : XB = 1 : 2 = AY : YC$$

$$AC \text{ \& } BC = ?$$

proof:

$$AX : XB = 1 : 2$$

$$\text{also } AY : YC = 1 : 2$$

$$\text{Let } AX \text{ be } x$$

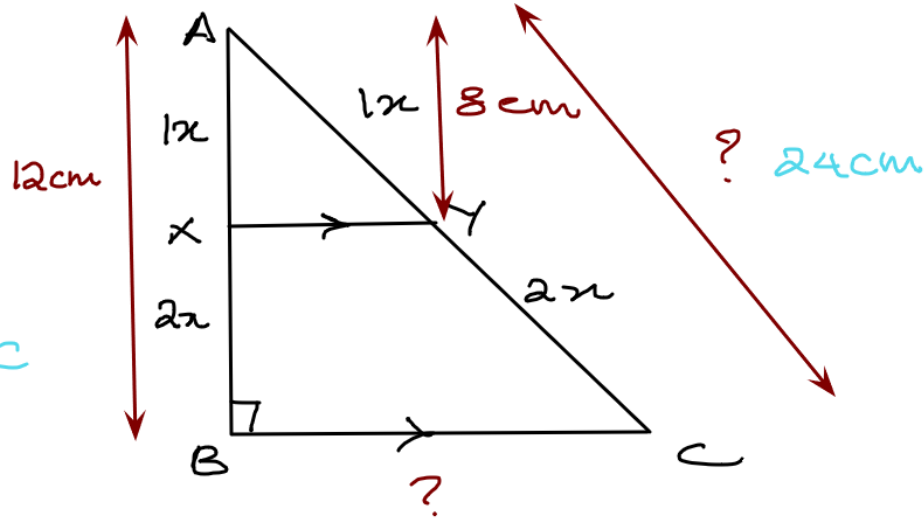
$$XB \text{ be } 2x$$

$$AY \text{ be } x$$

$$YC \text{ be } 2x$$

$$AX + XB = x + 2x$$

$$AB = 3x \quad [\because AB = AX + XB]$$



$$12 = 3x$$

$$\frac{12}{3} = x$$

$$4 = x$$

$$\therefore AX = 4 \text{ cm}$$

$$XB = 2 \times 4 \\ = 8 \text{ cm}$$

Since

$$AY = x$$

$$YC = \cancel{8\text{ cm}} \cdot 2x$$

$$AC = AY + YC \text{ --- (i)}$$

$$[\because AY = 8] \text{ --- (ii)}$$

$$\therefore YC = 2 \text{ of } AY$$

$$= 2 \times 8$$

$$= 16 \text{ --- (iii)}$$

Substituting ii & iii in (i)

$$AC = 8 + 16$$

$$= 24$$

In  $\triangle ABC$

$$\angle B = 90^\circ$$

$\therefore$  Using Pythagoras theorem

$$BC^2 = AC^2 - AB^2$$

$$BC^2 = (24)^2 - (12)^2$$

$$= 576 - 144$$

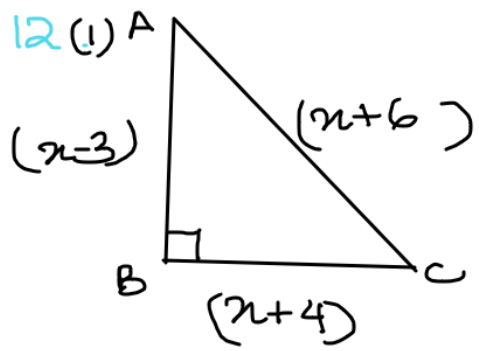
$$= 432$$

$$BC = \sqrt{432}$$

$$= \sqrt{2 \times 2 \times 2 \times 2 \times 3 \times 3 \times 3}$$

$$= 2 \times 2 \times 3 \sqrt{3}$$

$$= 12\sqrt{3} \text{ cm.}$$



Using Pythagoras theorem

$$AC^2 = AB^2 + BC^2$$

$$(x+6)^2 = (x-3)^2 + (x+4)^2$$

$$\cancel{x^2} + 36 + 12x = \cancel{x^2} + 9 - 6x + \cancel{x^2} + 16 + 8x$$

$$36 + 12x = x^2 + 2x + 25$$

$$36 - 25 = x^2 + 2x - 12x$$

$$11 = x^2 - 10x$$

$$x^2 - 10x - 11 = 0$$

$$x^2 - 11x + x - 11 = 0$$

$$x(x-11) + 1(x-11) = 0$$

$$(x-11)(x+1) = 0$$

$$x = 11 \text{ or } x = -1$$

discarding  $x = -1$

since length cannot be -ve value.

Since  $x = 11$

$$\therefore AB = x - 3$$

$$= 11 - 3$$

$$= 8 \text{ cm}$$

$$BC = x + 4$$

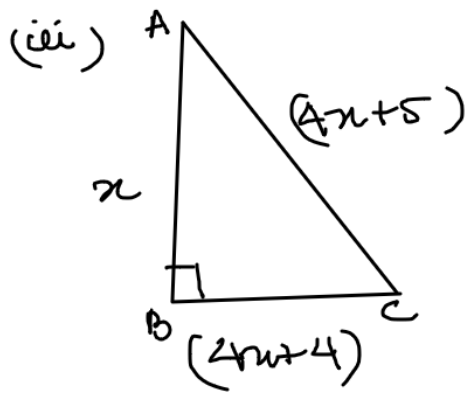
$$= 11 + 4$$

$$= 15 \text{ cm}$$

$$AC = x + 6$$

$$= 11 + 6$$

$$= 17 \text{ cm}$$



Since  $\triangle ABC$  is right angled at B using Pythagoras theorem.

$$\therefore AC^2 = AB^2 + BC^2$$

$$(4x+5)^2 = x^2 + (4x+4)^2$$

$$16x^2 + 25 + 40x = x^2 + 16x^2 + 16 + 32x$$

$$25 - 16 = x^2 + 32x - 40x$$

$$9 = x^2 - 8x$$

$$x^2 - 8x - 9 = 0$$

$$x^2 - 9x + 1x - 9 = 0$$

$$x(x-9) + 1(x-9) = 0$$

$$(x+1)(x-9) = 0$$

$$x+1=0 \text{ or } x-9=0$$

$$x = -1 \quad x = 9$$

$x = -1$  is discarded

since length cannot be a -ve value.

$$AB = x = 9 \text{ cm}$$

$$AC = 4x + 5$$

$$= 4 \times 9 + 5$$

$$= 36 + 5$$

$$= 41 \text{ cm}$$

$$BC = 4x + 4$$

$$= 4 \times 9 + 4$$

$$= 36 + 4$$

$$= 40 \text{ cm}$$

## 14 (A)

Quadrilateral — (1) figure with 4 sides

[Polygon]

[e.g. square, rectangle, parallelogram, Rhombus,  
Trapezium, kite]

(2) Sum of angles of a quadrilateral =  $360^\circ$

A quadrilateral is a parallelogram if —

a) opposite sides are equal.

b) " angles " "

c) The diagonals bisect each other.

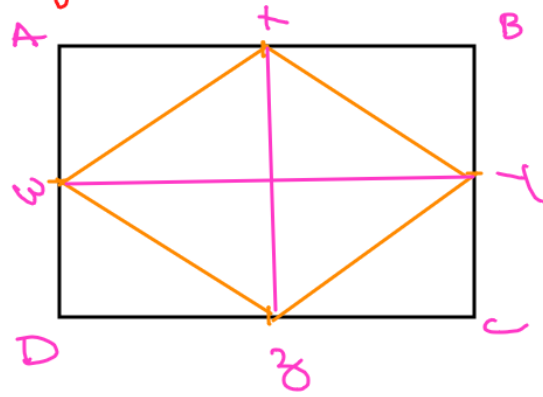
d) A pair of opposite sides are equal & parallel.

e) A diagonal divides a parallelogram into two congruent triangles.

Quadrilateral formed by joining the mid-points of the sides of



a quadrilateral is a parallelogram.



WXYZ in a quadrilateral ABCD is a parallelogram.

Rhombus — Diagonals of a rhombus bisect each other at right angles.

Square — Diagonals of a square bisect each other at right angles and they are equal.

Rectangle — Diagonals of a rectangle bisect each other.

Triangle — a) A line segment joining the mid points of any two sides of a  $\Delta$  is parallel to the third




$AB \parallel XY$   
X & Y are mid points of AC & BC


b) A line segment joining the mid-points of any two sides of a triangle is half of the third side.

c) A line through the mid-point of a side of a triangle, parallel to another side bisects the third side.

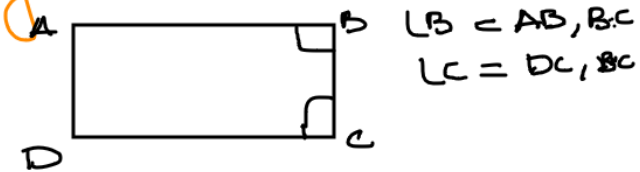
1. Two sides having a common end point are called adjacent side.



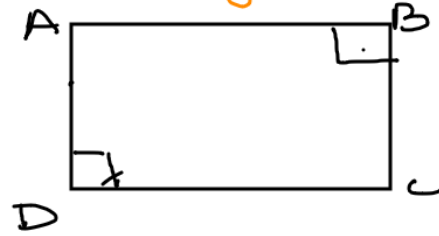
2. Two sides having no common end point are called opposite sides.



3. Two angles of a quadrilateral having a common arm are called consecutive angles.



4. Two angles of a quadrilateral having no common arms are called opposite angles.



angle sum property of quadrilateral =  $360^\circ$   
" " " " triangle =  $180^\circ$