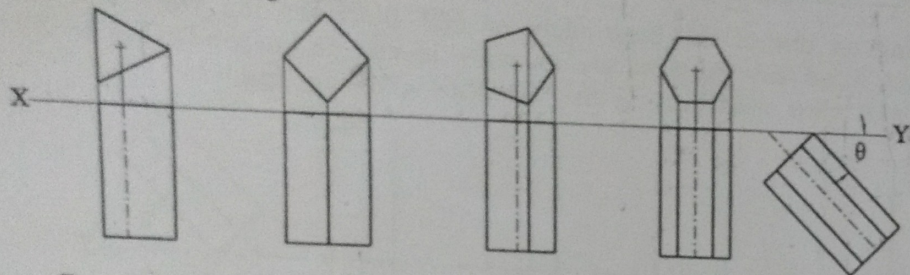


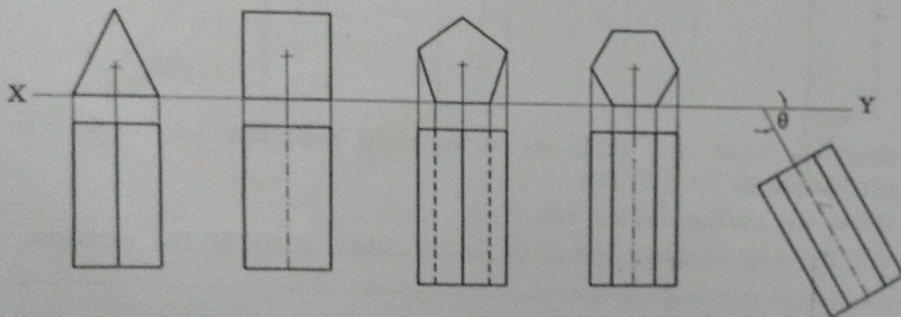
Resting on one of its corner on **VP** and axis or base is inclined to **VP** as given in the diagram.



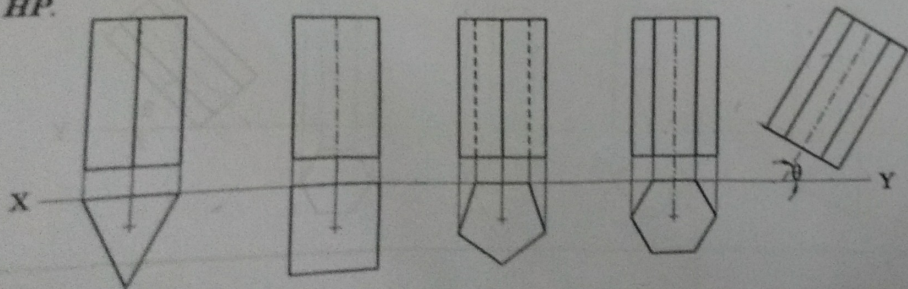
- Draw the front view as given in the diagram.
- Draw the top view
- Tilt the top view according to the condition.

Resting on one of its rectangular face on **HP**.

- Draw the front view with one of the edges should touch **XY** line.
- Tilt the top view according to the condition.

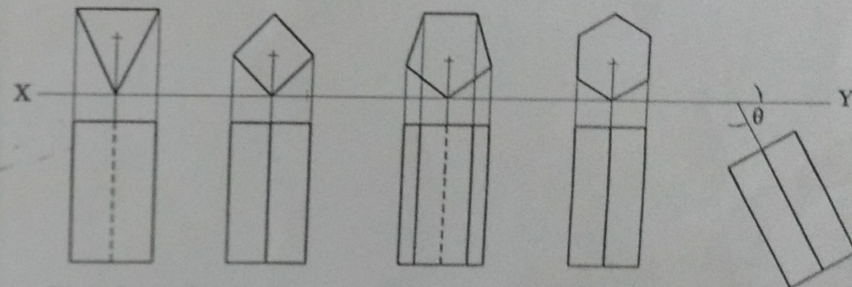


Resting on one of the rectangular face on **VP** and axis or base is inclined to **HP**.



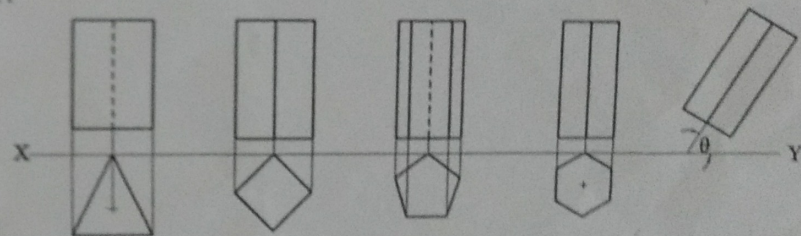
- First draw the top view with one of the edge should touch **XY**.
- Next draw the corresponding front view.
- Tilt the front view according to the condition given in the problem.

Resting on one of its longer edges on **HP** (or) Longer edges containing the rectangular face makes equal inclination with **HP**.



- First draw the front view with one of the corner should touch **XY** line.
- Tilt the top view according to the condition given in the problem.

Resting on one of the its longer edge on **VP** (or) Longer edge containing the rectangular face makes equal inclination with **VP** and axis or base is inclined to **HP**.



- First draw the top view with one of the corner should touch **XY** line.
- Draw the corresponding front view.
- Tilt the front view according to the condition given in the problem.